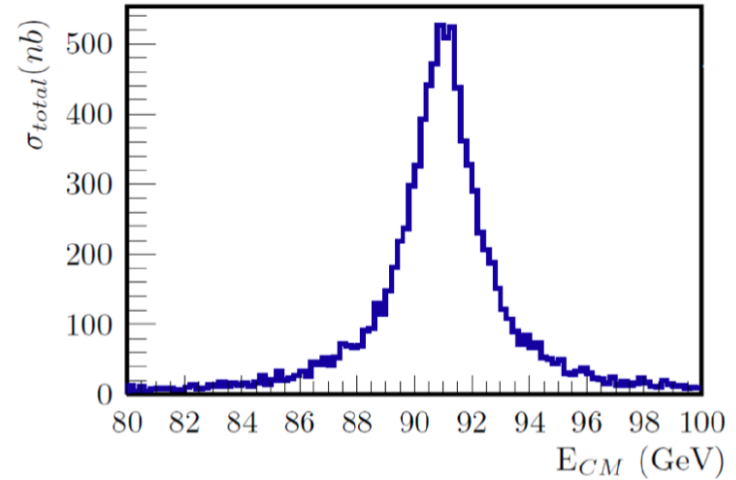
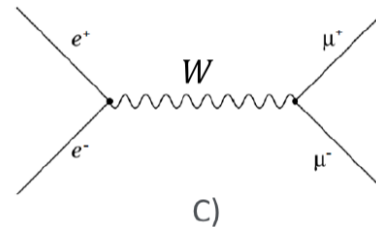
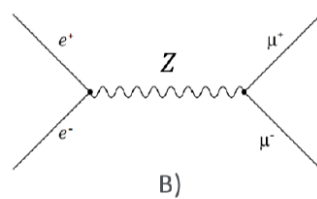
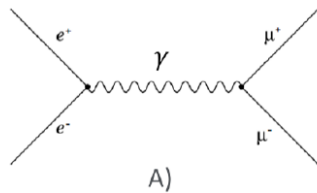


Warmup question

In a collider experiment, the scattering of an e^+e^- pair into muons is observed ($e^+ + e^- \rightarrow \mu^+ + \mu^-$). Plotting the total cross section against the energy, one obtains the plot on the right.



Which of the following processes gives the biggest contribution to the cross section in this region?



None of them

D)